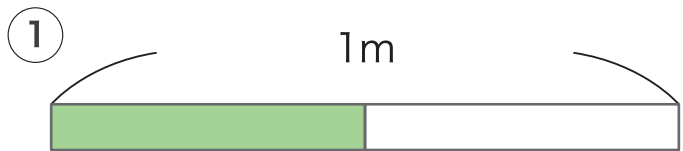


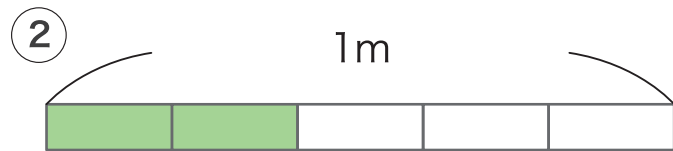
分数の仕組み

月	日
名前	

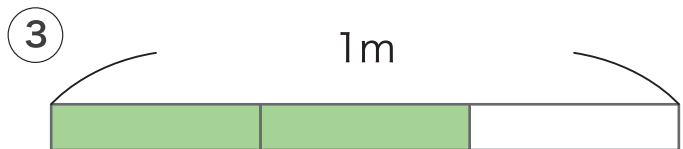
1 つぎの 色をぬったところの 長さを 分数で書きましょう。



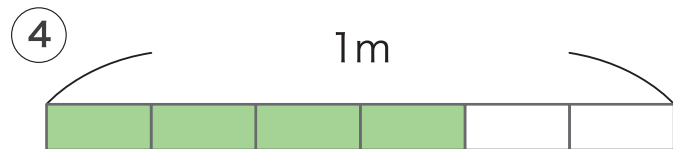
$$\frac{1}{2} \text{ m}$$



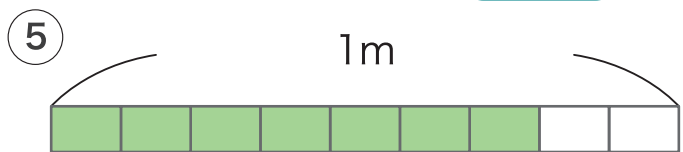
$$\frac{2}{5} \text{ m}$$



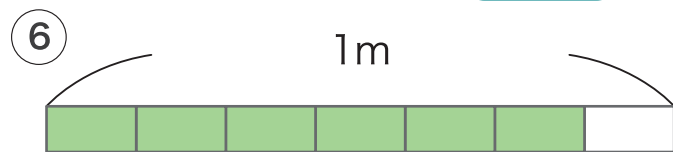
$$\frac{2}{3} \text{ m}$$



$$\frac{4}{6} \text{ m}$$

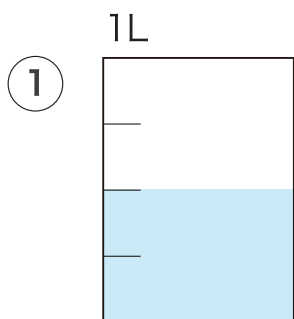


$$\frac{7}{9} \text{ m}$$

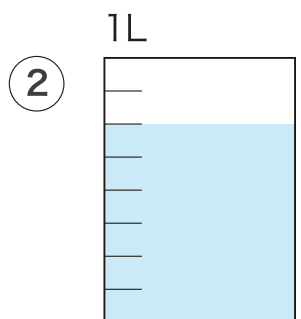


$$\frac{6}{7} \text{ m}$$

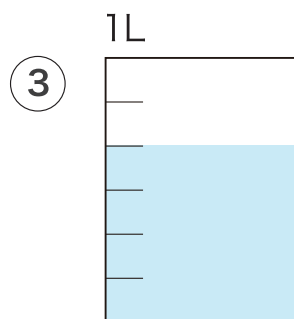
2 つぎの 水のかさを 分数で 書きましょう。



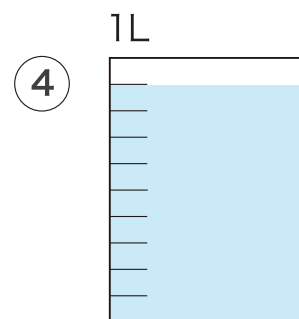
$$\frac{2}{4} \text{ L}$$



$$\frac{6}{8} \text{ L}$$



$$\frac{4}{6} \text{ L}$$



$$\frac{9}{10} \text{ L}$$