
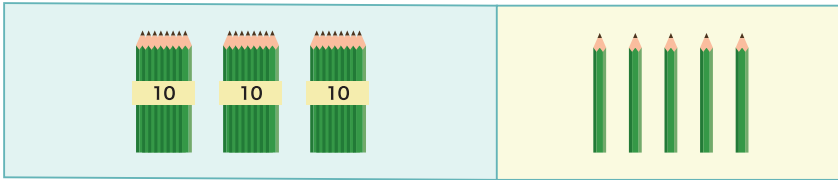


# ひき算のひっ算①


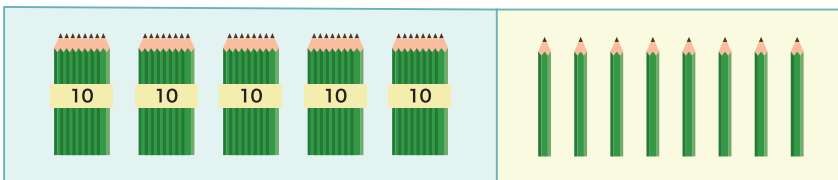
1 つぎの <sup>けいさん</sup>計算を ひっ算で しましょう。

①  $35 - 23$



	3	5
-	2	3
	1	2

②  $58 - 35$



	5	8
-	3	5
	2	3

2 つぎの 計算を しましょう。

①  $68 - 23$

	6	8
-	2	3
	4	5

②  $45 - 12$

	4	5
-	1	2
	3	3

③  $99 - 45$

	9	9
-	4	5
	5	4