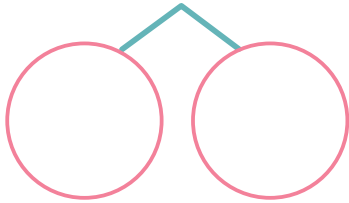
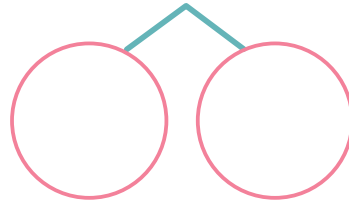


と に あてはまる かずを かきましょう。

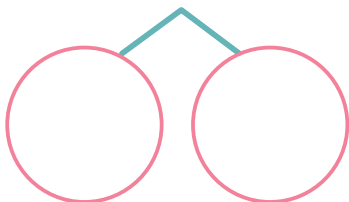
1 $12 - 5 = \square$



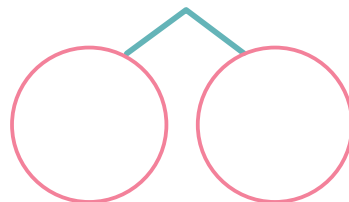
2 $13 - 8 = \square$



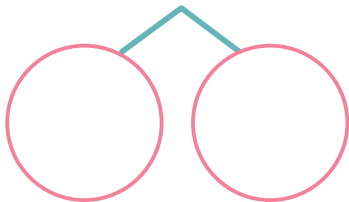
3 $14 - 6 = \square$




4 $17 - 9 = \square$




5 $16 - 7 = \square$




6 $15 - 8 = \square$




7 $11 - 6 = \square$



8 $12 - 9 = \square$



9 $11 - 8 = \square$



10 $14 - 7 = \square$

