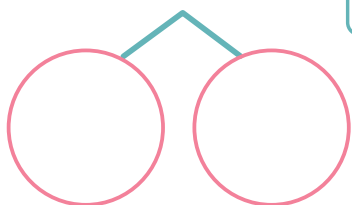
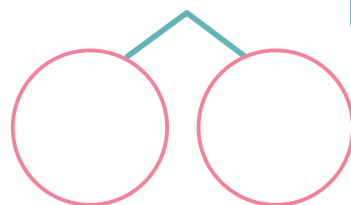


と  に あてはまる かずを かきましょう。

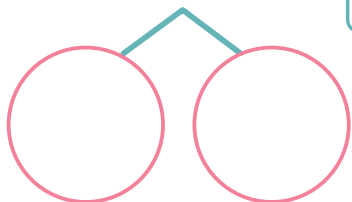
1  $4 + 8 = \square$



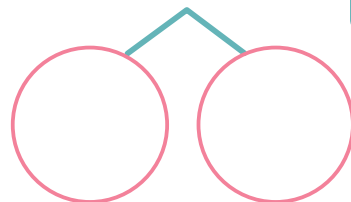
2  $7 + 9 = \square$



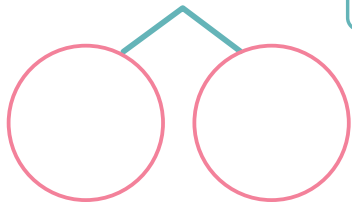
3  $5 + 6 = \square$




4  $2 + 9 = \square$




5  $8 + 7 = \square$




6  $9 + 9 = \square$




7  $7 + 6 = \square$



8  $6 + 8 = \square$



9  $5 + 7 = \square$



10  $6 + 9 = \square$

