

小
一

さんすうもんだい

おおきさくらべ / ひろさくらべ


がつ 日にち
なまえ

どちらが ひろいでしょう。①、②で こたえましょう。

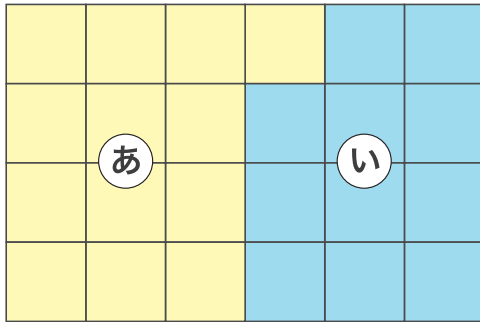
1

①



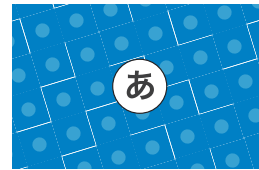
②



2




3




4

①



②



5

