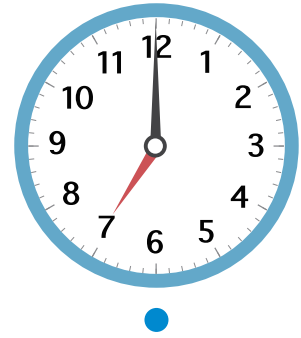
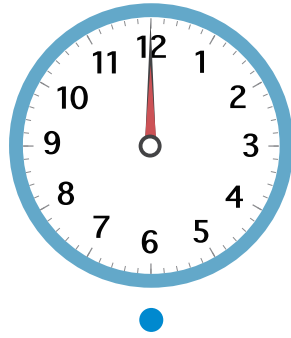
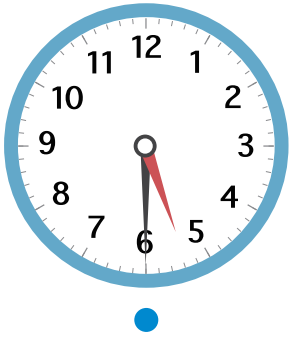


なんじ なんじはん

1 とけいの よみかたを ●—● で むすびましょう。

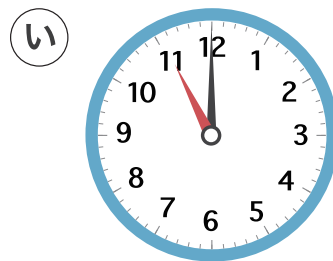



7じ

5じはん

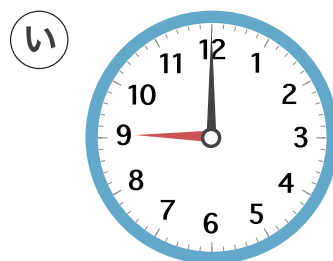

12じ

2 11じのとけいは ㊦、㊧のどちらでしょう。



こたえ

3 9じはんのとけいは ㊦、㊧のどちらでしょう。



こたえ